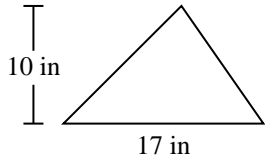


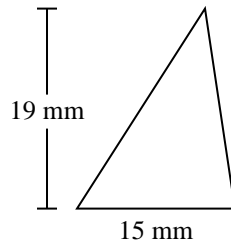


Find the area of each triangle. Units are not to scale.

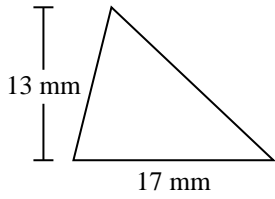
1)



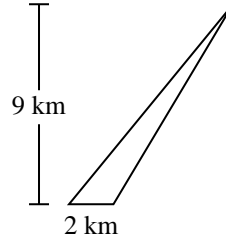
2)



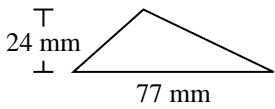
3)



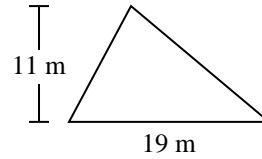
4)



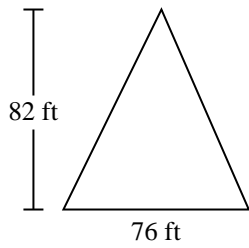
5)



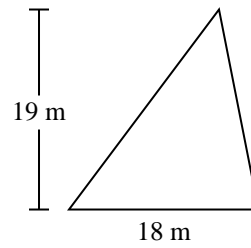
6)



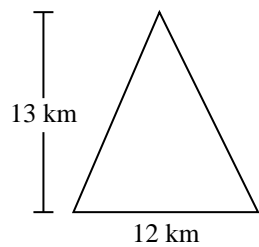
7)



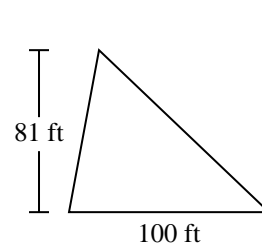
8)



9)



10)



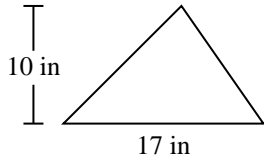
Answers

- 1. _____
- 2. _____
- 3. _____
- 4. _____
- 5. _____
- 6. _____
- 7. _____
- 8. _____
- 9. _____
- 10. _____

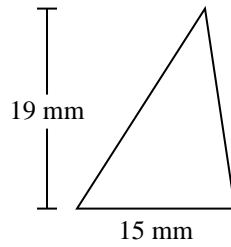


Find the area of each triangle. Units are not to scale.

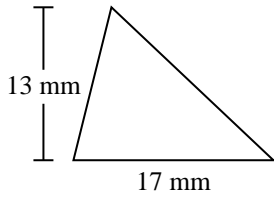
1)



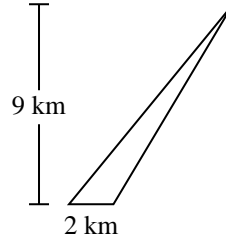
2)



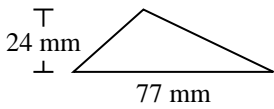
3)



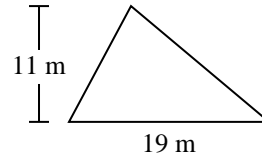
4)



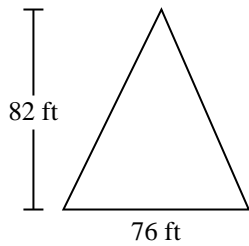
5)



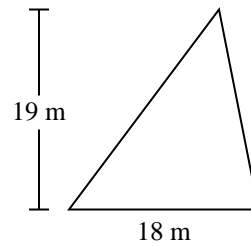
6)



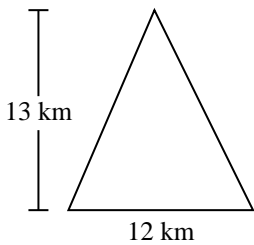
7)



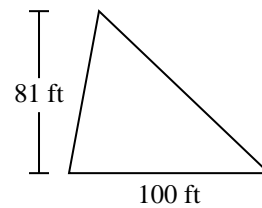
8)



9)



10)



Answers

1. 85 in²

2. 142.5 mm²

3. 110.5 mm²

4. 9 km²

5. 924 mm²

6. 104.5 m²

7. 3,116 ft²

8. 171 m²

9. 78 km²

10. 4,050 ft²



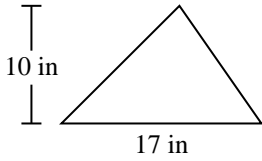
Find the area of each triangle. Units are not to scale.

Answers

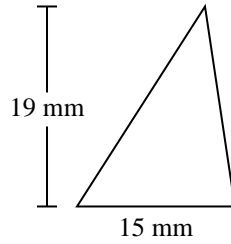
171	9	104.5	924
3,116	110.5	4,050	142.5
78	85		

1. _____
2. _____
3. _____
4. _____
5. _____
6. _____
7. _____
8. _____
9. _____
10. _____

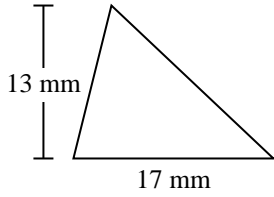
1)



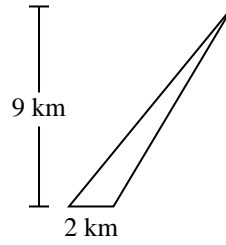
2)



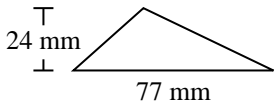
3)



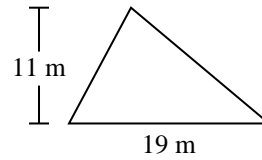
4)



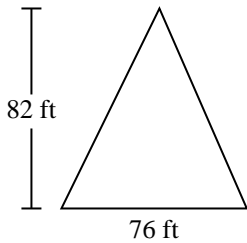
5)



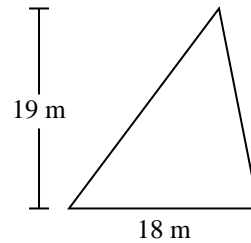
6)



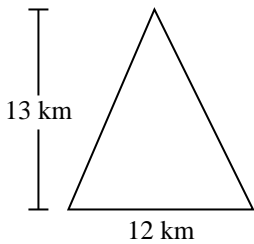
7)



8)



9)



10)

