

Kindergarten Summer Homework Packet


A review of kindergarten skills
to keep the mind active prior
to going into first grade.

Dear parents and families,

I am so proud of each and every one of the kindergartners this year and I have appreciated every minute I have spent with them. We have all worked so hard and learned so much throughout the year. I am sending home this homework packet and I strongly encourage you to set aside a few minutes each day to do the fun daily activities. This packet was made as a review tool but for those children that are ready to “go further” please do so!

I hope you all have a safe and happy summer!

Best wishes,



Monday


Write the missing beginning letter



_ o g




_ e b r a




_ i s h



_ a r



_ i o n



_ u n

Tuesday

Write numbers from 0-20


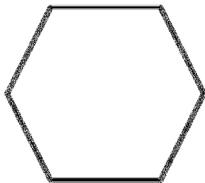

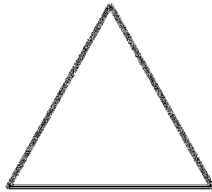

Wednesday

Write uppercase letters from A-Z

A				E		
	I					
O						U

Thursday

Label the Shapes



Word Bank

Rectangle Circle

Square Triangle

Hexagon

Change the first letter to make a new word.



mouse



bug



hen



_ ouse



_ ug

10

_ en



frog



fox



hat



_ og














_ ox



_ at

Monday

Count by 10's



Tuesday

Write words for the word families

_at

_an

_ap

_ad

Wednesday

Circle the number that is greater

4

10

5

11

8

2

15

12

0

9

20

13

1

3

17

18

7


6

19


16

Thursday

Circle the number of syllables



1 2 3



1 2 3



1 2 3



1 2 3

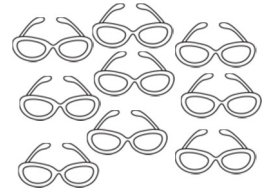

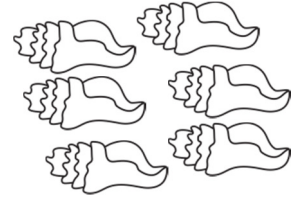

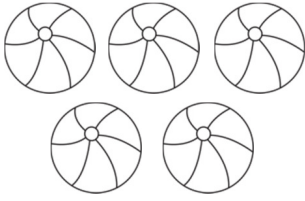


1 2 3



1 2 3

Count the objects and write the number.



Monday




Write lowercase letters from a-z

		c				
					m	
	p					
		w				

Tuesday

Complete the graph.



Which has the most?



Which has the least?



Wednesday

Edit the sentences.

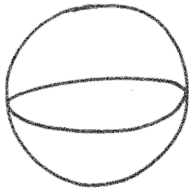
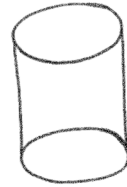
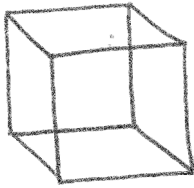
i love summer

will you play with me

i like ice cream

Thursday

Name the shapes.



Word Bank

cone

cylinder

cube

sphere

Friday

Read and find the sight words.

L	I	T	T	L	E
Z	K	H	C	R	S
T	H	E	T	W	P
B	X	Y	Q	I	N
M	V	B	U	T	G
J	F	O	D	H	E

Word Bank

little

they

he





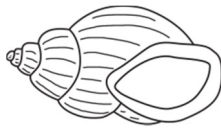
with

but

the

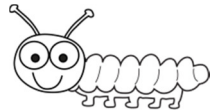

Monday

Circle the correct spelling.


	bog	odg	dog	ogb	gob
	ifsh	sfih	hisf	fish	fihs
	swing	wsing	sinwg	gniws	nisgw
	barc	arcb	crab	brca	carb
	Helsl	shell	llesh	shlel	elshl

Tuesday

Circle the object that would be heavier.



Circle the object that would be lighter.



Wednesday

Fill in the blank using the words from the word bank.

_____ you have _____ toy?

Will _____ play _____ me?

I got a gift _____ you.

I _____ to play at _____ park.

Word Bank

my

with

want

Will

for

you

the

Thursday

Practice counting to 100 today.



I counted by 1's



I counted by 10's



I counted by 5's

Friday

Write the mixed up sight words correctly.

akme

htiw

tiltel

yeht

moce

rehte

eht

hist

Word Bank

little

they

this

with

there

the

come


make

Monday


Write the missing ending letter.



do _



po _




cra _



ja _




snai _




su _

Tuesday

Write the equation to match the picture.



_____ + _____ = _____



_____ + _____ = _____



_____ + _____ = _____



_____ + _____ = _____

Wednesday

Write the words in the word bank under the matching vowel.

a

e

i

o

u

Word Bank

cat pot bib get mud
den pig man dug rod

Thursday

Write the different equations to make the number in the box.

3

4

5

_____ + _____ = 3

_____ + _____ = 4

_____ + _____ = 5

_____ + _____ = 3

_____ + _____ = 4

_____ + _____ = 5

_____ + _____ = 3

_____ + _____ = 4

_____ + _____ = 5

_____ + _____ = 4

_____ + _____ = 5

_____ + _____ = 4

_____ + _____ = 5

_____ + _____ = 5

Friday

Write the mixed up sight words correctly.

awht

uor

odog

idd

ilwl

dna

uoy

isad

Word Bank

you

will

our

and

what

said

did


good

Monday


Write upper and lowercase letters from a-z.

Tuesday

Write and solve the subtraction problems.



$$\underline{\quad} - \underline{\quad} = \underline{\quad}$$



$$\underline{\quad} - \underline{\quad} = \underline{\quad}$$



$$\underline{\quad} - \underline{\quad} = \underline{\quad}$$



$$\underline{\quad} - \underline{\quad} = \underline{\quad}$$



$$\underline{\quad} - \underline{\quad} = \underline{\quad}$$

Wednesday

Re-write the sentence with the correct punctuation.

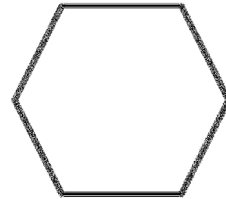
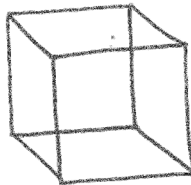

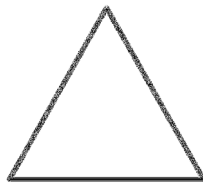
I love summer

Will you play with me

I like ice cream

Thursday

Is the shape flat or 3-D?



Friday

Read and find the sight words.

l	p	h	n	f	q
i	j	g	o	o	d
k	r	m	t	s	i
e	h	b	w	b	d
u	a	t	h	a	t
v	s	z	y	m	o

Word Bank

like

good

did

that


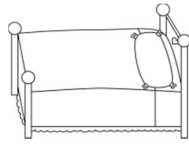

not

has

am

Monday

Write the missing middle letter.




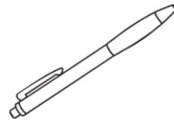

c _ _ t

d _ _ g

b _ _ d

f _ _ sh

b _ _ g



p _ _ g

m _ _ g

p _ _ n

fr _ _ g

cr _ _ b

Tuesday

Draw a picture with rods and units and write the equation.

12

___ + ___ = ___

17

___ + ___ = ___

15

___ + ___ = ___

13

___ + ___ = ___

19

___ + ___ = ___

Wednesday

Write a complete sentence and draw a picture about:

What do you like about summer?

Thursday

Draw a picture and solve the word problems.

If Kim has 4 apples and gets 2 more, how many does she have in all?

If Rob has 5 cookies and gives 2 to his friends, how many does he have left?

Friday

Write your personal information.

First and last name:


Address:

Birthday:

Phone number:

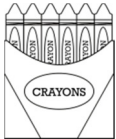




Monday






Draw and write the number to show how many.

hearts		4
flowers		
circles		
X's		

Tuesday

Count the syllables in each word and write the number.

Wednesday

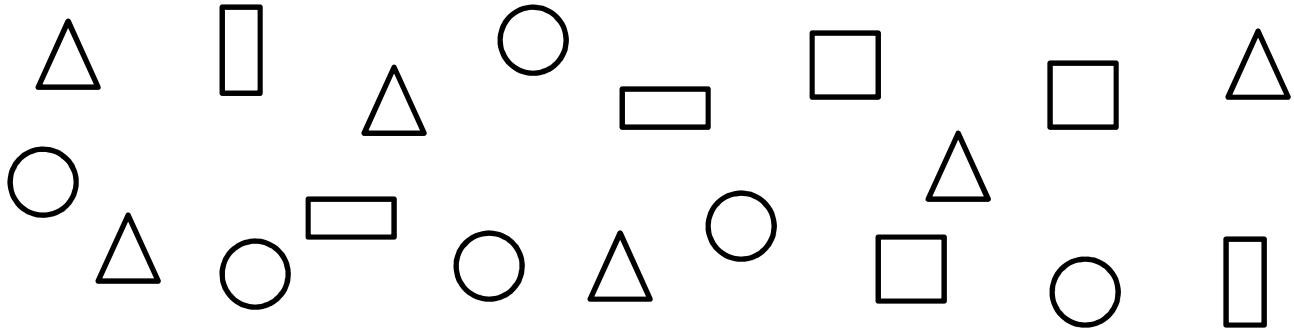
How Many:

Color triangles  green

Color squares  blue

Color rectangles  red

Color circles  yellow



How many triangles?

How many circles?

How many squares?

How many rectangles?

Thursday


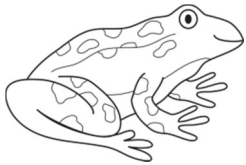

Draw a picture and solve the word problems.

If I took a walk in the park and saw 3 birds in a tree and 4 birds on the pond, how many birds did I see?

If Tami made 10 cookies and ate 2, how many cookies did she have left?


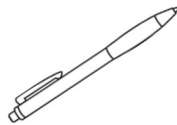

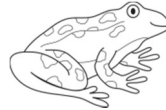


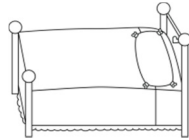

Friday

Draw a line to the picture that rhymes.



Monday

Circle the pictures from the _at family.



Tuesday

Write the number needed to make 10. Color the boxes if needed.


Example: $3 + \underline{7} = 10$




$3 + \underline{\quad} = 10$



$0 + \underline{\quad} = 10$



$5 + \underline{\quad} = 10$



$7 + \underline{\quad} = 10$



$1 + \underline{\quad} = 10$




Wednesday

Write a complete sentence and draw a picture about:

How do you feel about going to first grade?

Thursday

Circle the correct position word.



The dolphin is the sea turtle.

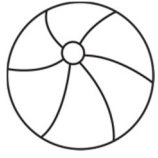
The crab is the seaweed.

The shark is the seahorse.


The sea star is the sea turtle.

Friday

Draw a line from the word to the matching picture.



crab



sun



ball



lion



dog



zebra

Monday

Write 5 or more words that rhyme with hat.



A large, empty rounded rectangular box intended for writing words that rhyme with 'hat'.

Tuesday

Count forward.

10

4

0

5

Wednesday

Write a complete sentence and draw a picture about:

What do you think you will like best about first grade?

Thursday

Color "thumbs up" if the equation is true or "thumbs down" if the equation is false.



$$2+3=4$$



$$5+0=5$$



$$1+3=4$$



$$2+1=2$$




$$3+2=4$$



$$0+2=2$$




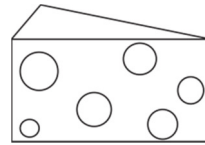
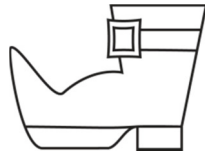

Friday

Write 5 or more words that rhyme with sun. 

A large, empty rounded rectangular box intended for writing the answer to the rhyme exercise.

Monday

Circle words that begin with /sh/. Underline words that begin with /ch/.



Tuesday


Use the pictures to help you solve the subtraction problems.



$$5 - 4 = \square$$



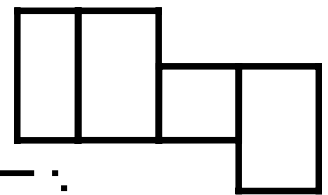
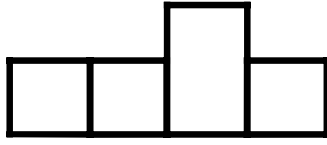
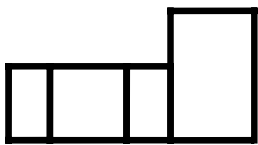
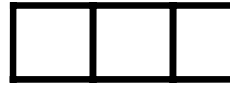
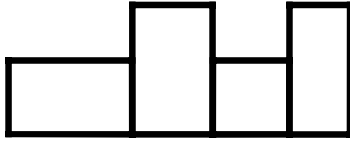
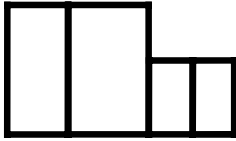
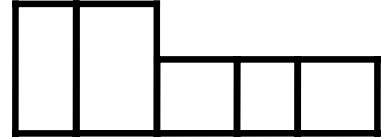
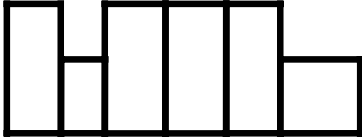
$$3 - 1 = \square$$



$$4 - 0 = \square$$

Wednesday

Fill in the letter shape boxes using the word bank words.

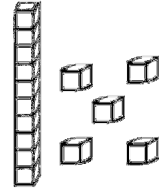
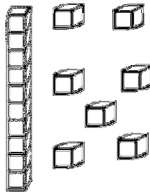
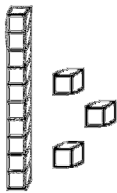
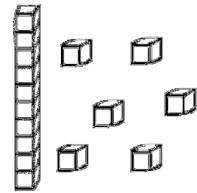
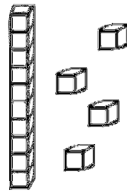
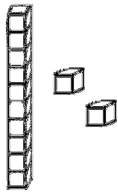


Word Bank

little this they come make
said our there what but

Thursday

Write the number that matches the picture.



Friday

Write the missing middle letter.

b _ t



d _ g



b _ s



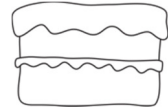
ch _ ck



f _ sh




c _ ke



m _ p



c _ t



Thank you so much for purchasing this product. I hope your students enjoy it as much as I enjoyed making it. If you have any questions or comments please share.

Graphics by: Scrappin Doodles

