

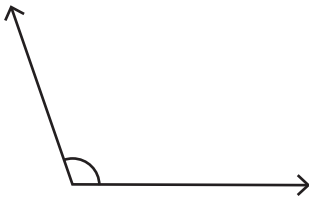
Name : _____

Score : _____

Classifying Angles

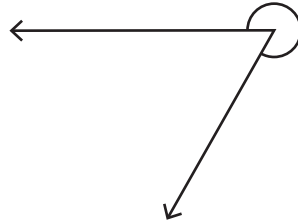
Classify each angle as acute, obtuse, right, straight or reflex.

1)



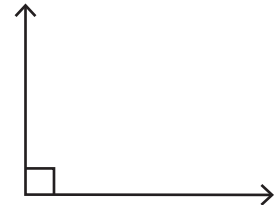
Type : _____

2)



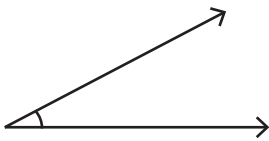
Type : _____

3)



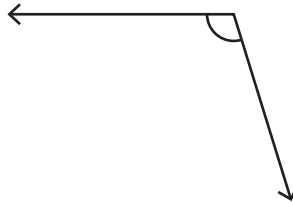
Type : _____

4)



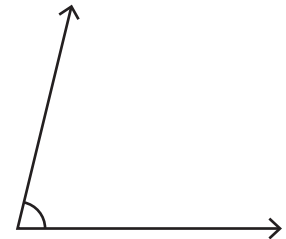
Type : _____

5)



Type : _____

6)



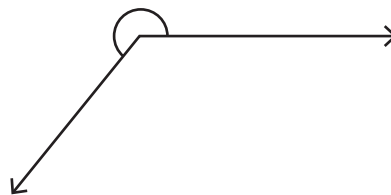
Type : _____

7)



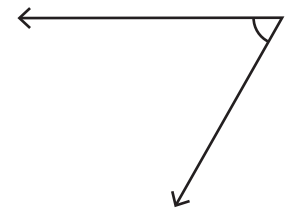
Type : _____

8)



Type : _____

9)



Type : _____

10) 192°

Type : _____

11) 58°

Type : _____

12) 120°

Type : _____

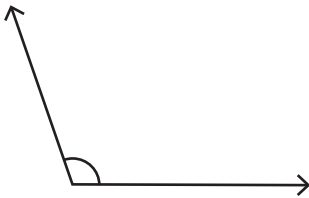
Name : _____

Score : _____

Answer Key

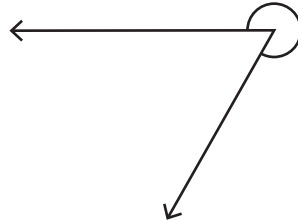
Classify each angle as acute, obtuse, right, straight or reflex.

1)



Type : **Obtuse**

2)



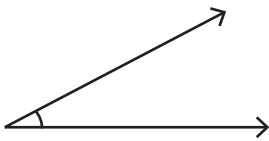
Type : **Reflex**

3)



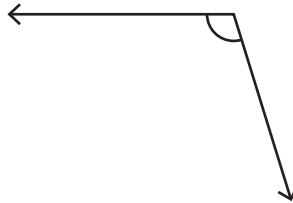
Type : **Right**

4)



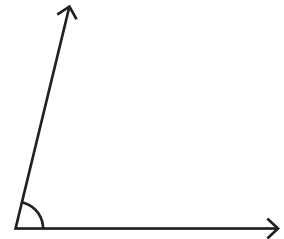
Type : **Acute**

5)



Type : **Obtuse**

6)



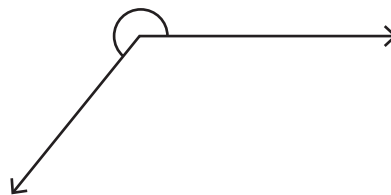
Type : **Acute**

7)



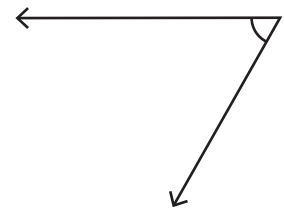
Type : **Straight**

8)



Type : **Reflex**

9)



Type : **Acute**

10) 192°

Type : **Reflex**

11) 58°

Type : **Acute**

12) 120°

Type : **Obtuse**